









Name: _____

Place Value

Write the corresponding numbers.

 <table border="1" data-bbox="456 562 813 814"> <thead> <tr> <th>Tens</th> <th>Ones</th> </tr> </thead> <tbody> <tr> <td> </td> <td> </td> </tr> </tbody> </table>	Tens	Ones			 <table border="1" data-bbox="1187 562 1544 814"> <thead> <tr> <th>Tens</th> <th>Ones</th> </tr> </thead> <tbody> <tr> <td> </td> <td> </td> </tr> </tbody> </table>	Tens	Ones		
Tens	Ones								
Tens	Ones								
 <table border="1" data-bbox="456 861 813 1113"> <thead> <tr> <th>Tens</th> <th>Ones</th> </tr> </thead> <tbody> <tr> <td> </td> <td> </td> </tr> </tbody> </table>	Tens	Ones			 <table border="1" data-bbox="1187 861 1544 1113"> <thead> <tr> <th>Tens</th> <th>Ones</th> </tr> </thead> <tbody> <tr> <td> </td> <td> </td> </tr> </tbody> </table>	Tens	Ones		
Tens	Ones								
Tens	Ones								
 <table border="1" data-bbox="456 1186 813 1438"> <thead> <tr> <th>Tens</th> <th>Ones</th> </tr> </thead> <tbody> <tr> <td> </td> <td> </td> </tr> </tbody> </table>	Tens	Ones			 <table border="1" data-bbox="1187 1186 1544 1438"> <thead> <tr> <th>Tens</th> <th>Ones</th> </tr> </thead> <tbody> <tr> <td> </td> <td> </td> </tr> </tbody> </table>	Tens	Ones		
Tens	Ones								
Tens	Ones								
 <table border="1" data-bbox="456 1480 813 1732"> <thead> <tr> <th>Tens</th> <th>Ones</th> </tr> </thead> <tbody> <tr> <td> </td> <td> </td> </tr> </tbody> </table>	Tens	Ones			 <table border="1" data-bbox="1187 1480 1544 1732"> <thead> <tr> <th>Tens</th> <th>Ones</th> </tr> </thead> <tbody> <tr> <td> </td> <td> </td> </tr> </tbody> </table>	Tens	Ones		
Tens	Ones								
Tens	Ones								