


Name: \_\_\_\_\_

# Telling Time

Draw the hands of the clock and write the time in words.




5:00

\_\_\_\_\_

\_\_\_\_\_

\_\_\_\_\_




10:00

\_\_\_\_\_

\_\_\_\_\_

\_\_\_\_\_




7:00

\_\_\_\_\_

\_\_\_\_\_

\_\_\_\_\_




9:00

\_\_\_\_\_

\_\_\_\_\_

\_\_\_\_\_




11:00

\_\_\_\_\_

\_\_\_\_\_

\_\_\_\_\_




1:00

\_\_\_\_\_

\_\_\_\_\_

\_\_\_\_\_




8:00

\_\_\_\_\_

\_\_\_\_\_

\_\_\_\_\_



2:00

\_\_\_\_\_

\_\_\_\_\_

\_\_\_\_\_